

Date : _____

Name : _____

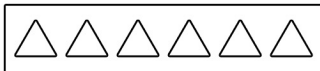
Score : _____

Represent numbers

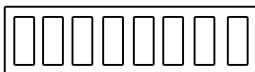
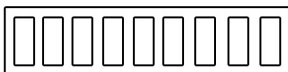
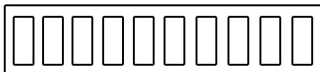
Which picture shows 2 circles ?



Which picture shows 6 triangles ?



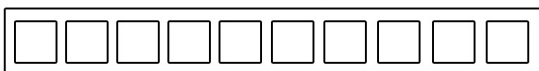
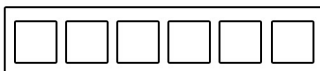
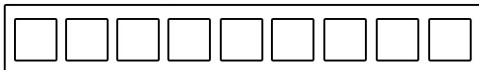
Which picture shows 8 rectangles ?



Which picture shows 4 stars ?



Which picture shows 10 squares ?



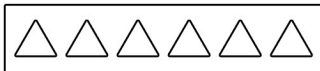
Score : _____

Represent numbers

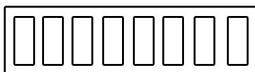
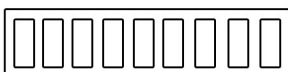
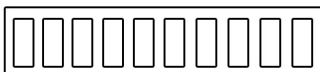
Which picture shows 1 circles ?



Which picture shows 3 triangles ?



Which picture shows 9 rectangles ?



Which picture shows 5 stars ?



Which picture shows 7 squares ?

