

Date : _____

Name : _____

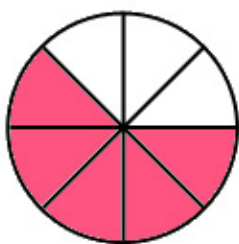
Score : _____

FRACTIONS ADDITION

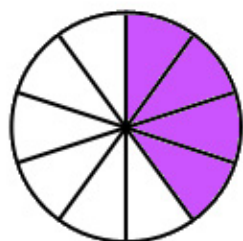
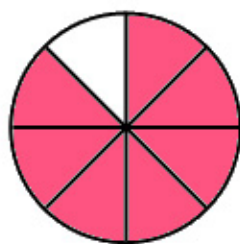
Add the Fractions & Colour the Picture.



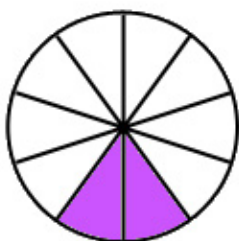
$$\frac{2}{8} + \frac{5}{8}$$



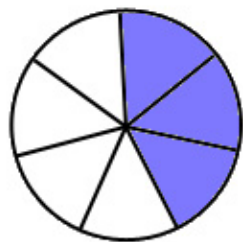
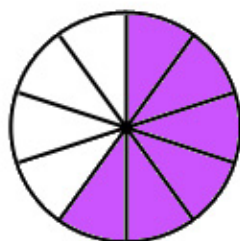
$$= \frac{7}{8}$$



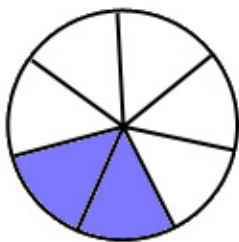
$$\frac{4}{10} + \frac{2}{10}$$



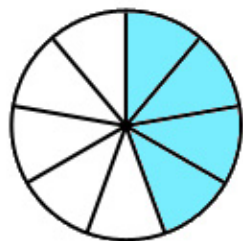
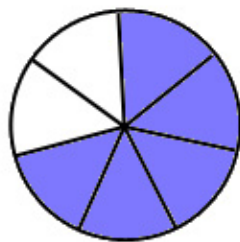
$$= \frac{6}{10}$$



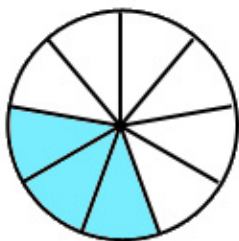
$$\frac{3}{7} + \frac{2}{7}$$



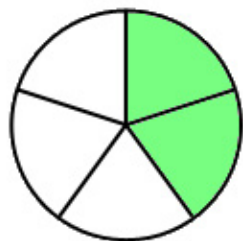
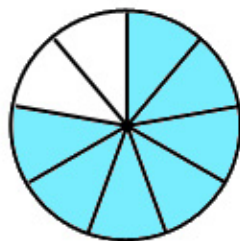
$$= \frac{5}{7}$$



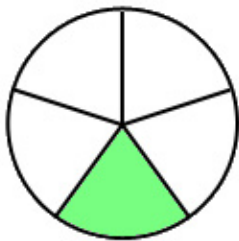
$$\frac{4}{9} + \frac{3}{9}$$



$$= \frac{7}{9}$$



$$\frac{2}{5} + \frac{1}{5}$$



$$= \frac{3}{5}$$

