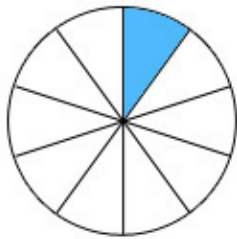
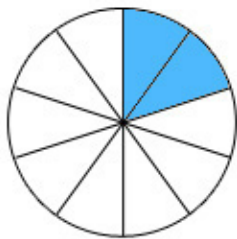


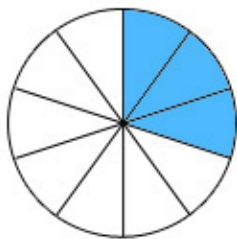
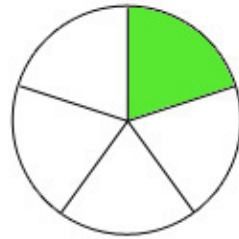
# Fractions



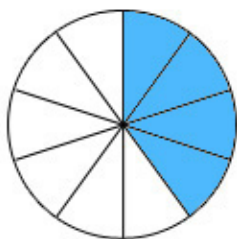
$$\frac{1}{10}$$



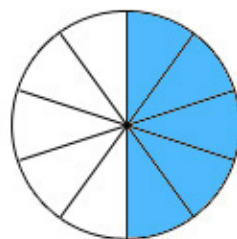
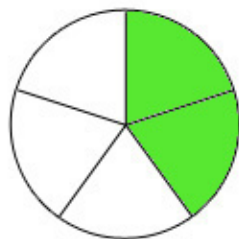
$$\frac{2}{10} = \frac{1}{5}$$



$$\frac{3}{10}$$



$$\frac{4}{10} = \frac{2}{5}$$



$$\frac{5}{10} = \frac{1}{2}$$

