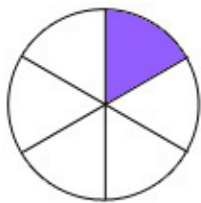
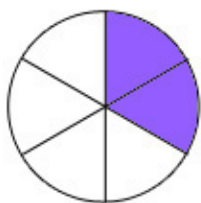


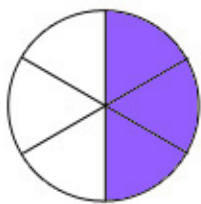
# Fractions



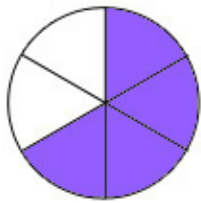
$$\frac{1}{6}$$



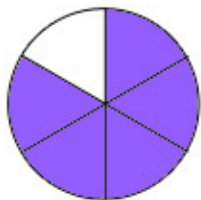

$$\frac{2}{6}$$



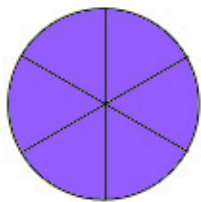
$$\frac{3}{6}$$



$$\frac{4}{6}$$



$$\frac{5}{6}$$



$$\frac{6}{6}$$

